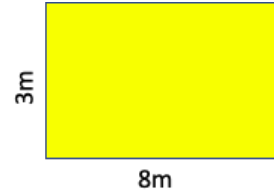
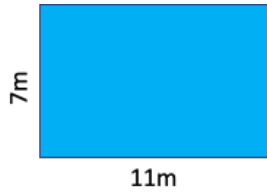
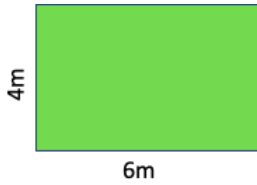


Session Eight- Area

Area of a rectangle = Length x Width

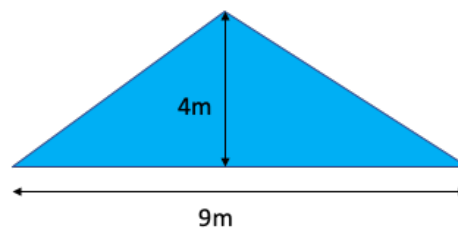
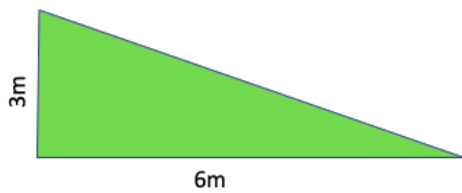


A) Area = _____m

B) Area = _____m

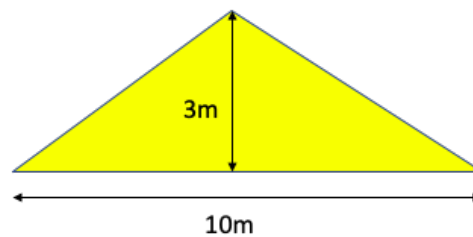
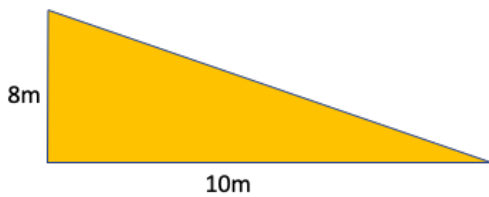
C) Area = _____m

Area of a triangle = Base x Height \div 2



D) Area = _____m

E) Area = _____m



F) Area = _____m

G) Area = _____m

ANSWERS

- A) 24m^2
- B) 77m^2
- C) 24m^2
- D) 9m^2
- E) 18m^2
- F) 40m^2
- G) 15m^2