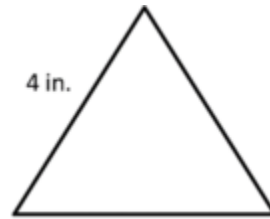
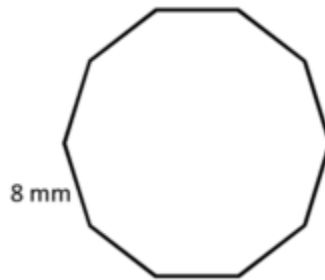
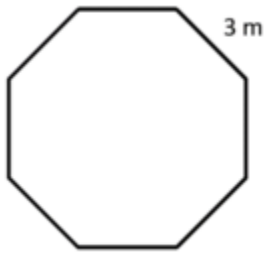


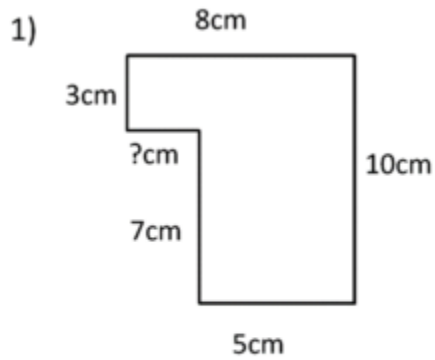
Session Seven- Perimeter



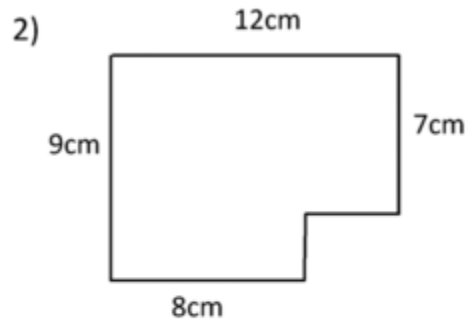
A) Perimeter= _____

B) Perimeter= _____

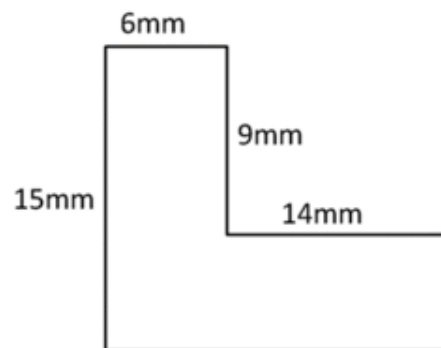
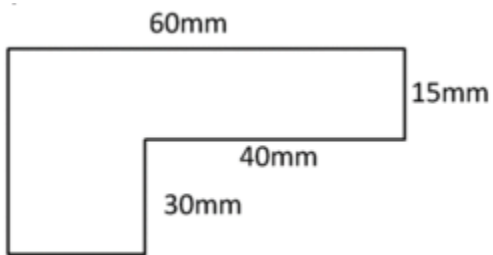
C) Perimeter= _____



Perimeter = _____ cm



Perimeter = _____ cm



D) Perimeter= _____

E) Perimeter= _____

ANSWERS

- A) 24m
- B) 80mm
- C) 12 inches

- 1) 36 cm
- 2) 42 cm

- D) 210 mm
- E) 70 mm